

WINTER HOLIDAYS

CLASS-IV



LET'S START.....

The much awaited holidays are here yet again and it's time to play and have fun!! We have planned for you some fun activities to make the optimum use of your energy and give a vent to your creativity so that you continue learning during the holiday break as well.

General Instructions:

- 1. Bring holiday homework separately of each subject and submit the same to the respective subject teachers.*
- 2. Parents are requested to only guide their children while doing the assignments.*
- 3. All the works should be handwritten and done neatly and independently.*
- 4. Originality of the work will be appreciated.*
- 5. Project | Homework will be assessed on the basis of neatness, creativity and originality of ideas.*
- 6. Submission of all assignments and worksheets is compulsory and will be graded for final assessment as well.*
- 7. Learn and practice syllabus of Periodic Assessment – 4.*



Here is your
Ho-Ho-Ho
Homework
for the
Holidays...




English

In which country was Olympics 2016 held? Name the games that were included in it. Write at least 5 players of five games on an A4 size sheet.



योग के किन्हीं तीन आसनों के चित्र ऐ - 4 साइज शीट पर चिपकाइए और उनके विषय में लिखिए।



Create beautiful symmetrical figures and patterns by vegetable printing, sponge impression, thumb printing etc. on an A4 size sheet.

Find out information about any one historical site in India. Write this information on A-4 size ruled sheet. (Add pictures also)



Make a beautiful craft work using cotton on an A4 size sheet.

ENGLISH WINTER ASSIGNMENT - I (2024 -25)

NAME: _____ CLASS IV

Q1. Fill in the blanks with correct degree of adjectives:

- i) Which mountain is the _____ in the world? (high)
- ii) This car is _____ car in the world in 2021. (expensive)
- iii) Chocolate cakes are _____ than banana cakes. (delicious)
- iv) I'm as _____ at football as my best friend. (good)
- v) This tree is _____ tree in our street. (big)

Q2. Combined the sentences using conjunctions:

i) The game was very easy. No one won.

ii) Amina can be a doctor. Amina can be a lawyer.

iii) Football is a great sport. I am not good at it.

iv) John is sick. He needs to go to the doctor.

Q3. Write Comparative and Superlative degrees of these adjectives:

<u>Positive</u>	<u>Comparative</u>	<u>Superlative</u>
Happy	_____	_____
Old	_____	_____
Many	_____	_____
Big	_____	_____
Strong	_____	_____

ENGLISH WINTER ASSIGNMENT - II (2024 -25)

NAME: _____ CLASS IV

Q1. Complete the sentences with the suitable words given in the clue box:

(because / or / but / so / for)

i) My mom likes winters _____ I like summer season.

ii) Do you like cold drinks _____ milk.

iii) We have pizza _____ burger for today's dinner.

iv) Zainab ordered perfumes _____ these are her favourite.

Q2. Who said to whom?

i) My Lord I have found out the difference.

ii) Please I would like to listen to it.

iii) How intelligent! I am amazed.

Q3. Fill in the blanks:

i) A mushroom doesn't have to _____ its room.

ii) _____ is never told not to play with spears.

iii) All the _____ tried one by one but none could find the difference.

iv) _____ present in the court became very happy.

Q4. What were the tasks the robot was supposed to do?

हिंदी शीतकालीन अवकाश कार्यपत्रिका - 1 (2024-25)

नाम- _____

कक्षा - 4

प्रश्न 1. निम्नलिखित काव्यांश को पढ़कर पूछे गए प्रश्नों के उत्तर दीजिए।

पल भर रूठें ,पल भर मानें,
खेलें कूदें,हँसे-हँसाए।
वर्षा में नाचे और गाएँ,
कागज़ की किशती तैराएँ।
साँप-सीढ़ी अब हुए पुराने,
कंप्यूटर के खेल मन भाएँ।
मम्मी रोकें लाख मगर,
आइसक्रीम मन छोड़ न पाए।
बचपन का हर लम्हा ऐसा,
जीवन-भर कभी भूल न पाएँ।

क) काव्यांश में जीवन की किस अवस्था का वर्णन किया गया है ?

ख) वर्षा में बच्चे क्या-क्या करते हैं ?

ग) आधुनिक युग में बच्चों ने कौन-कौन से खेल पुराने समझकर छोड़ दिए हैं ?

घ) अपने बचपन की दो घटनाएँ जो आपको याद हैं, लिखिए।

ङ) कविता में संज्ञा शब्द की सूची बनाइए।

हिंदी शीतकालीन अवकाश कार्यपत्रिका - 2 (2024-25)

नाम- _____

कक्षा - 4

प्रश्न1. अर्थ समझकर वाक्य बनाइए। (अनेकार्थी शब्द)

क) जल

ख) कल

ग) सोना

प्रश्न2. दिए गए चित्रों के दो-दो पर्यायवाची शब्द लिखिए।











MATHS WINTER ASSIGNMENT - I (2024-25)

NAME: _____

CLASS - IV

Q1. Find radius when diameter is:

a) 10 cm = _____

b) 12 cm = _____

c) 24 cm = _____

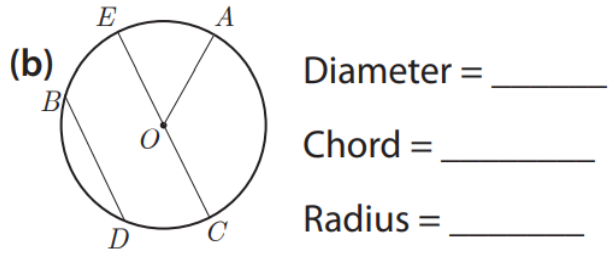
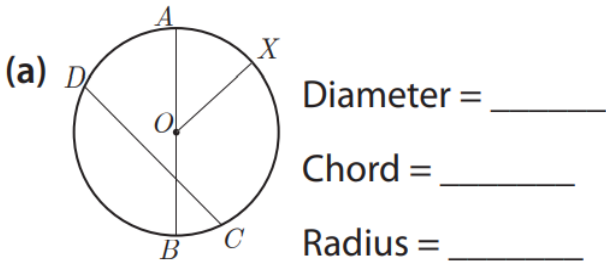
Q2. Find diameter when radius is:

a) 9 cm = _____

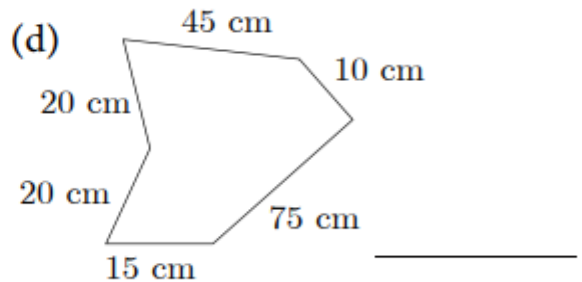
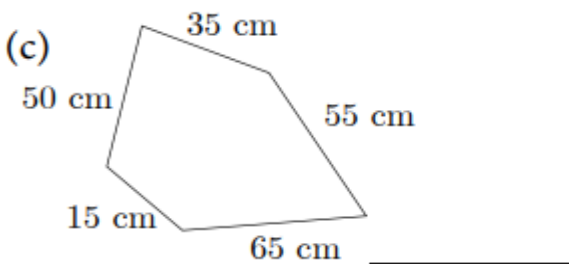
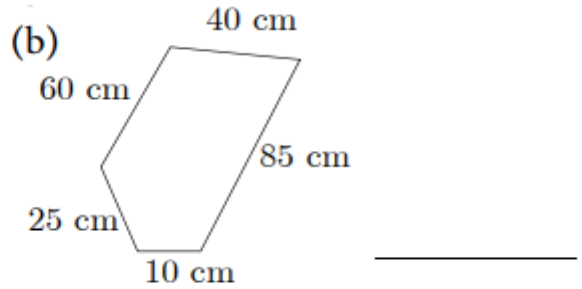
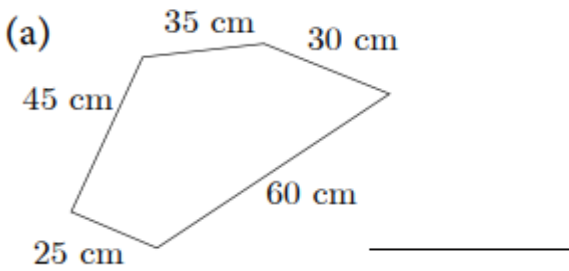
b) 12 cm = _____

c) 11 cm = _____

Q3. Name the following:



Q4. Find perimeter of the following figures:



Q5. Write the following fractions in words:

(a) $\frac{2}{3} =$ _____

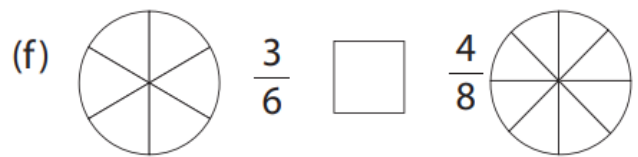
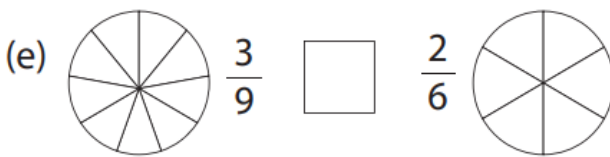
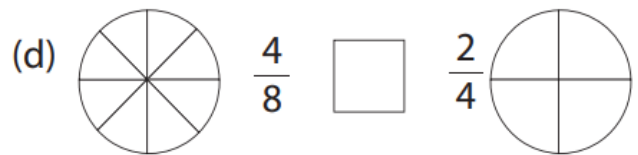
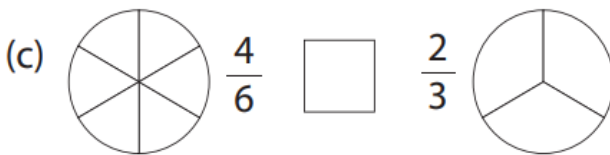
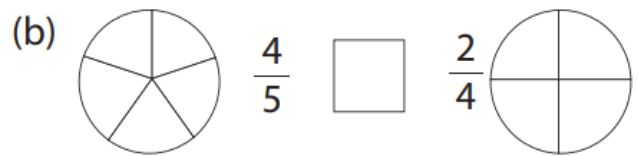

(b) $\frac{7}{9} =$ _____

(c) $\frac{5}{15} =$ _____

(d) $\frac{4}{8} =$ _____



Q6. Shade and compare the following fractions using $< / > / =$



Q7. Find the following:

(a) $\frac{1}{2}$ of 36 = _____

(b) $\frac{2}{7}$ of 49 = _____

(c) $\frac{3}{6}$ of 42 = _____

(d) $\frac{5}{9}$ of 81 = _____

(e) $\frac{8}{12}$ of 108 = _____

(f) $\frac{5}{10}$ of 40 = _____

(g) $\frac{5}{6}$ of 72 = _____

(h) $\frac{7}{8}$ of 104 = _____



MATHS WINTER ASSIGNMENT - II (2024-25)

NAME: _____

CLASS - IV

Q1. Compare the following:

(a)



(b)



Q2. Convert the following:

(a) 5000 mL = _____ L

(b) 8 L 450 mL = _____ mL

(c) 42500 mL = _____ L _____ mL

(d) 32000 mL = _____ L

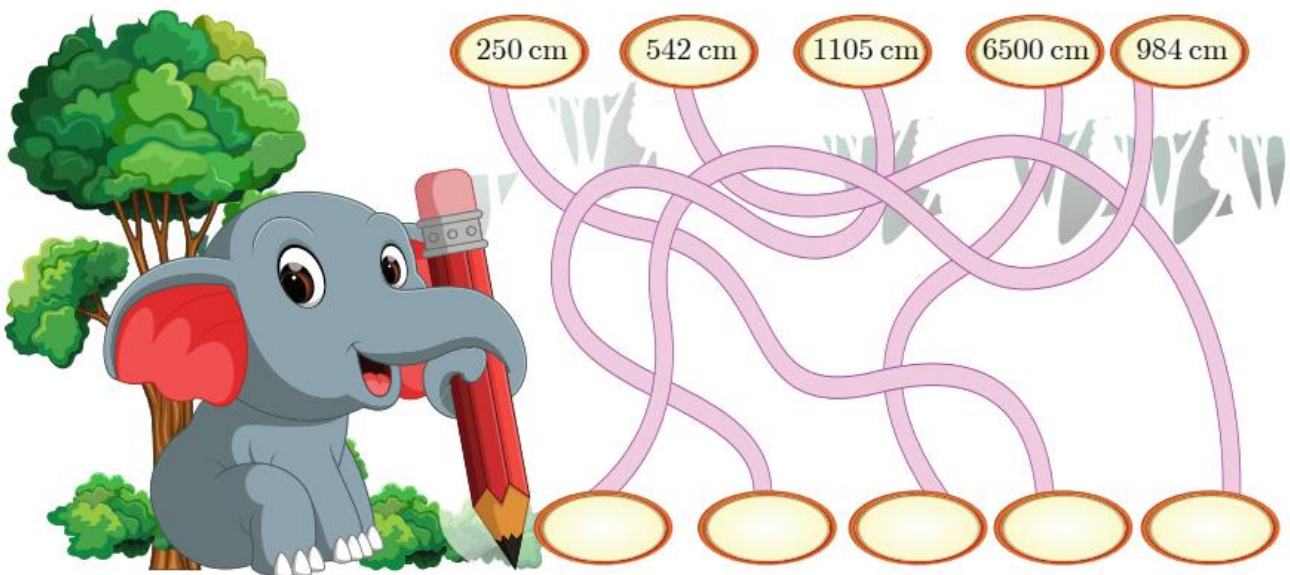
(e) 2 L 500 mL = _____ mL

(f) 34 L 450 mL = _____ mL

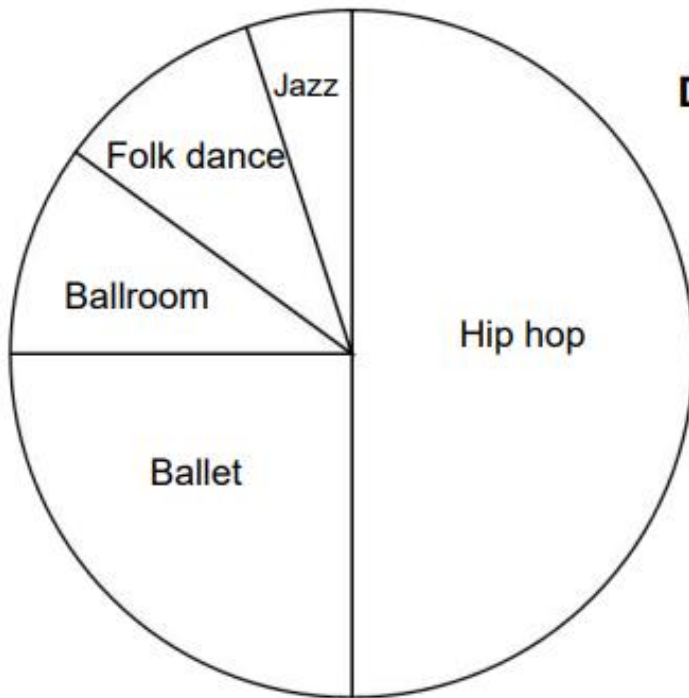
(g) 25 L = _____ mL

(h) 32460 mL = _____ L _____ mL

Q3. Convert the following into metres:



Q4. The circle graph shows data on the dance classes attended by kids. Study the graph and answer the questions below.



Different dance classes



1. What fraction of the kids attended ballet class? _____
2. Which class was attended by the most kids? _____
3. Which class was attended by one-fourth of the kids? _____
4. Which class was attended the fewest kids? _____
5. Which three classes if combined were attended by one-fourth of the kids? _____
6. What fraction of the kids attended hip hop, ballroom, folk dance and jazz class combined? _____

E.V.S WINTER ASSIGNMENT - I (2024-25)

NAME: _____

CLASS - IV

Q1. Write 'T' for the true and 'F' for the false statements:

- i) Decay means to become damaged or worse over time. ()
- ii) Omnivores do not have sharp front teeth. ()
- iii) Trunk of the elephant helps it to break branches. ()
- iv) Tooth decay happens when germs in mouth create a sticky covering. ()

Q2. Draw arrows and label the types of teeth:



Q3. Rewrite the sentences correcting the errors:

- i) Penguins also called scaly anteaters.

- ii) The tongue interprets the message and tells us what we are eating.

Q3. Manish likes to have sugary food items after every meal. He also likes to have fizzy drinks every day. His teeth have started to become yellow and stained. What advices will you give to him? Write any four advices.

E.V.S WINTER ASSIGNMENT - II (2024-25)

NAME: _____

CLASS - IV

Q1. See the picture carefully and answer the questions:



i) Identify the type of pollution?

ii) Name any one pollutant of this type of pollution.

iii) Write any one effect of it.

Q2. Rewrite the sentences correcting the errors:

i) Tap water is considered to be one of the most important sources of fresh water.

ii) Gravity are the small rounded stones often mixed with sand.

Q3. Write any four ways to conserve and protect water.
